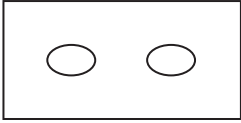


1.



Cevap: D

2.



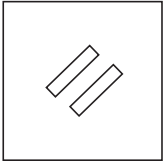
Cevap: D

3.



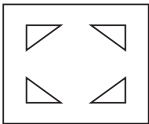
Cevap: D

4.



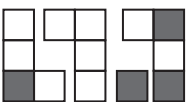
Cevap: B

5.



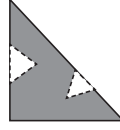
Cevap: A

6.



Cevap: B

7.



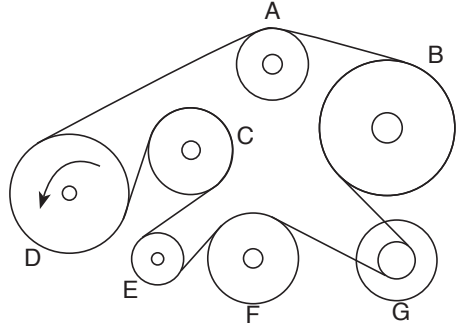
Cevap: D

8.



Cevap: B

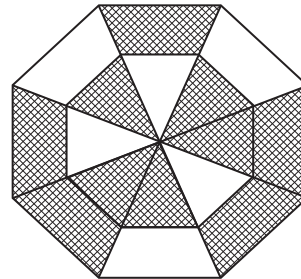
9.



G döner çapı en küçük olan daha çok döner.

Cevap: E

10.



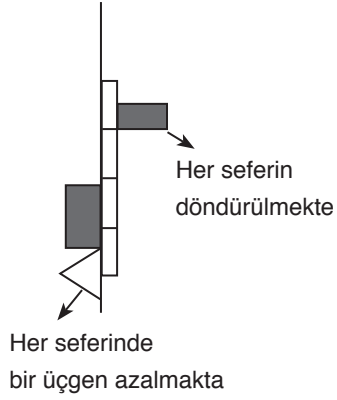
16 parçanın 10'u taralı

$$\frac{10}{16} = \frac{5}{8} \text{ dir.}$$

Şeklin yüzde $\frac{5}{8}$ gölgelidir

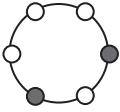
Cevap: C

11.



Cevap: B

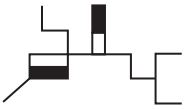
12.



Sola doğru siyah dairelerin biri bir adım diğeri 2 adım ilerlemekte

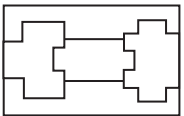
Cevap: D

13.



Cevap: B

14.



şekiller birleştirilince C seçeneği oluşmakta

Cevap: C

15.




Cevap: E

16.



Cevap: E

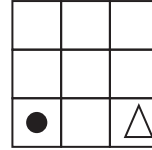
17.



Soldaki şekil ile sağdaki şekil birleştiriliyor.

Cevap: E

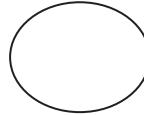
18.



- Siyah daire köşegen üzerinde 1 adım ilerlemekte
- Üçgen sağa doğru döndürülerek bir adım ilerlemekte

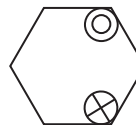
Cevap: B

19.



Cevap: C

20.



Cevap: E